



**YEAR 4**

**Thursday 28<sup>th</sup> September**

**Homework Tasks (Year 4):**

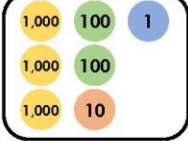

- **Maths:** Please complete – and mark - the ‘Ordering Numbers’ tasks on the next pages of this document and record your responses in your homework jotter book.

*Please place your homework books in the homework box by **Wednesday 4<sup>th</sup> October***

- **Spelling:** A spelling test, on **Autumn Term 1 -Week 2 Purple words** will take place next **Thursday** (see the separate spelling sheet for this term – it is split into weeks and you will be instructed which week we are currently learning).
- **Times Tables:** Please complete - and mark- Autumn Term: Workout 2 p4-5 of your CGP 10-minute weekly workout book and your weekly test on the **3x, and 5x** table will be next **Friday**.
- **Reading:** Please read for 45mins throughout the week.

## Ordering Numbers







4. Arrange these numbers to make the statement correct.

A	B	C	D
2,993		3,085	
	>		>
	>		>



VF  
HW/Ext

5. These children have been playing a computer game. They are discussing their scores. Place the children in the league table.

 Jian	<div style="border: 1px solid black; border-radius: 15px; padding: 5px; display: inline-block;">           I have scored 3,206 points         </div>	 Ben	<div style="border: 1px solid black; border-radius: 15px; padding: 5px; display: inline-block;">           My score is:            </div>
 Amy	<div style="border: 1px solid black; border-radius: 15px; padding: 5px; display: inline-block;">           My score is:            </div>	 Josh	<div style="border: 1px solid black; border-radius: 15px; padding: 5px; display: inline-block;">           My score is 3,216 points         </div>






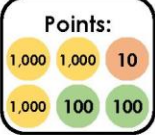

Position	Name	Score
1st		
2nd		
3rd		
4th		



VF  
HW/Ext

6. Josh is playing a computer game. To win the game he needs to catch the three aliens worth the most points.

Which three aliens should he catch? Explain your answer.

					
	Points: 	Points: 2,590	Points: 2,955	Points: 2,805	Points: 
	A	B	C	D	E



RPS  
HW/Ext

Answers:

Expected

4. 116, 119, 241, 251, 423, 578

5. The order from greatest to smallest is: 930 (Trevor); 623 (Sam); 581 (Maria); 292 (Ian); 273 (Ana). Maria finished in third place.

6. Various answers, for example: 338, 312, 261, 164, 105