



YEAR 4

Thursday 7th December

Homework Tasks (Year 4):

- **Maths** : Please complete – and mark - the ‘Multiply and divide by 6’ tasks on the next pages of this document and record your responses in your homework jotter book.

*Please place your homework books in the homework box by
Wednesday 13th December*

- **Spelling:** A spelling test, on **Autumn Term 2 -Week 5 yellow words** will take place next **Thursday** (see the separate spelling sheet for this term – it is split into weeks and you will be instructed which week we are currently learning).
- **Times Tables:** Please complete - and mark- Autumn Term: Workout 11 p22-23 of your CGP 10-minute weekly workout book and your weekly test on the **7x** table will be next **Friday**.
- **Reading:** Please read for 45mins throughout the week.

Multiply and Divide by 6

4. Maya is organising flowers into 6 vases.

She says,



I have 48 flowers. How many will go in each vase?



Draw the correct number of flowers in vases and complete the calculations below.

A. \div =


B. \times =




VF
HW/Ext

5. Match the calculation to the correct bar model.

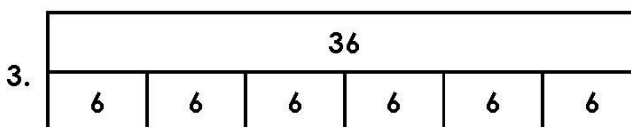
A.



B.



C.



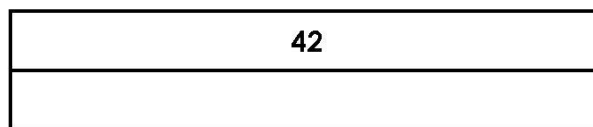
VF
HW/Ext

6. A shopkeeper has 42 apples left to sell. The apples come in packs of 6.

He says,



I have 6 packs of apples left to sell.



Explain the shopkeeper's mistake. Use the bar model to prove it.



RPS
HW/Ext

Answers

Expected

4. 8 flowers drawn in each vase; A – $48 \div 6 = 8$, B – $8 \times 6 = 48$
5. A – 2, B – 3, C – 1
6. The shopkeeper has 7 packs of apples left to sell because $42 \div 6 = 7$.