



YEAR 3

Thursday 23rd November

Homework Tasks (Year 3):

- **Maths** : Please complete – and mark - the ‘Addition challenges’ tasks on the next pages of this document and record your responses in your homework jotter book.

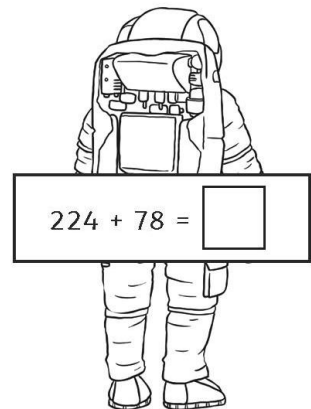
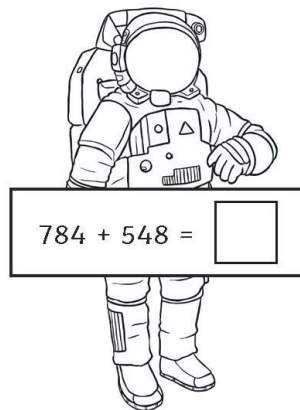
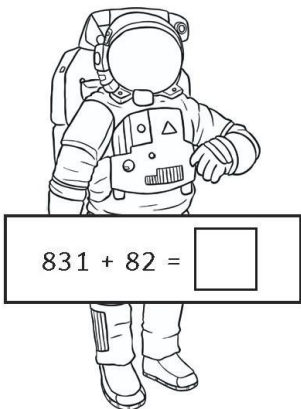
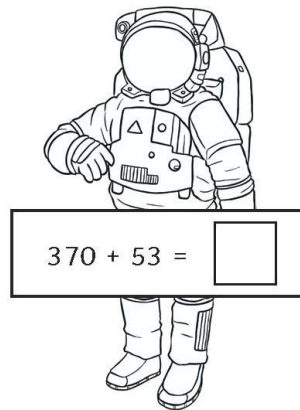
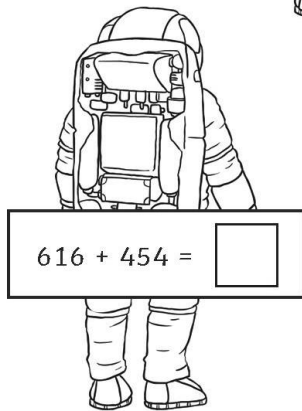
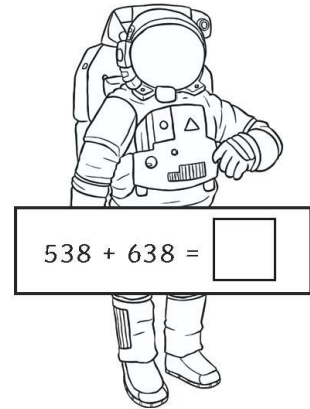
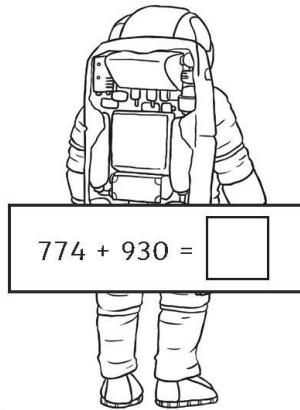
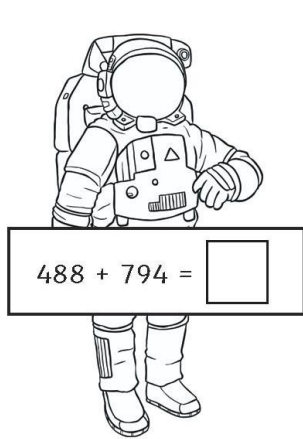
*Please place your homework books in the homework box by **Wednesday 29th November***

- **Spelling:** A spelling test, on **Autumn Term 2 -Week 3 green words** will take place next **Thursday** (see the separate spelling sheet for this term – it is split into weeks and you will be instructed which week we are currently learning).
- **Times Tables:** Please complete - and mark- Autumn Term: Workout 9 p18-19 of your CGP 10-minute weekly workout book and your weekly test on the **3x and 10x** table will be next **Friday**.
- **Reading:** Please read for 45mins throughout the week.

Year 3 Adding Numbers up to Three Digits with Regrouping

Space-Themed Maths Activity Games

Work out the calculations that the astronauts are holding. Then sort them into the correct space shuttle. Shuttle A = answers less than 1000. Shuttle B = Answers more than 1000.



Which space shuttle has the most astronauts?

Answers

$$488 + 794 = 1282$$

$$774 + 930 = 1704$$

$$538 + 638 = 1176$$

$$616 + 454 = 1070$$

$$370 + 53 = 423$$

$$831 + 82 = 913$$

$$784 + 548 = 1332$$

$$224 + 78 = 302$$

Space shuttle A = 3 astronauts

Space shuttle B = 5 astronauts