

Homework Tasks (Year 5):

- **GPS:** Please read 'Hades' on pg.2 of this file then answer – and mark – the 'Word' and 'Sentence' questions on pg.3 and 4. Answers can be found on pg.5. Please use these to help work out how to answer any questions you are unsure about. Your responses should be recorded in your Homework Jotter provided by school.
- **Maths:** Please complete – and mark – 'Fraction of an Amount' on pg.6 of this file. Answers can be found on pg.7. Please use these to help work out how to answer any questions you are unsure about. Your responses should be recorded in your Homework Book provided by school.

***Please ensure your completed homework is handed in at school on
Wednesday 31st January.***

- **Spelling:** A spelling test on **Spring 1 Week 3** list of words will take place next **Friday**. The list of words is available separately on the Woodpecker Class page of the school website. Please log onto Spelling Shed to support practice at home.
- **Multiplication Facts:** A test of a variety of multiplication facts will take place every **Thursday**. Please practise all facts up to 12 x 12.
- **Reading:** You are expected to do **at least 20 minutes** of independent reading at home, **every day**. *Please remember to log all new books read – both those at home and at school – in our class reading log as there are no home reading records in Woodpecker Class:*

Hades



After they died, the Ancient Greeks believed that their souls went to a dark place called the Underworld. After being judged by the gods Aeacus, Minos and Rhadamanthus, souls were ruled over by the god Hades.

In Ancient Greek, the name Hades means “The Unseen One”, which was given to him because he rarely left the Underworld. Interestingly, the Greeks were very suspicious about talking about Hades or the Underworld, so instead, they referred to Hades as Plouton, which meant “The Wealth-Giver”. This was because they knew that precious metals and minerals were found underground where they believed Hades lived. This name - Plouton - was later used by the Ancient Romans for their god of the Underworld, Pluto.

There aren't many statues or pieces of art containing Hades because they thought he was so horrific to look at. When he was included in art, he was often shown with his three-headed dog, Cerberus.



FOCUS ON - WORD

1 Write the root words.

Root Word

Suffixed Word
rarely
shown
referred
horrific

2 Write the present tense verbs.

died _____
meant _____
thought _____
knew _____

3 Circle the correct determiner.

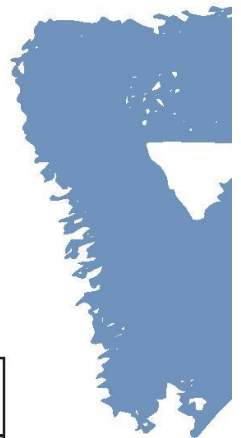
- a / an ancient god
- a / an piece of art
- a / an precious metal

CHALLENGE

4 Draw a line to match the antonyms.

rarely
died
horrific

alive
beautiful
often



FOCUS ON - SENTENCE

1 Often and rarely belong to which word class?

Tick one.

- adjectives
- adverbs
- verbs
- nouns

2 Rewrite the sentence below with the subordinate clause at the start.

Remember to punctuate your sentence correctly.

There aren't that many states or pieces of art containing Hades because they thought he was so horrific to look at.

3 Identify the different word classes in the noun phrase below.

Write the correct letter in each box.

<input type="text"/>	<input type="text"/>	<input type="text"/>
↓	↓	↓

his three-headed dog

A = noun

B = adjective

C = determiner

4 Underline the relative clause.

They referred to Hades as "The Wealth-Giver" because precious metals and minerals were found underground where he lived.



Answers - Hades

WORD

1. rare – rarely
show – shown
refer – referred
horror - horrific
2. died = die
meant = mean
thought = think
knew = know
3. an ancient god
a piece of art
a precious metal

CHALLENGE QUESTION:

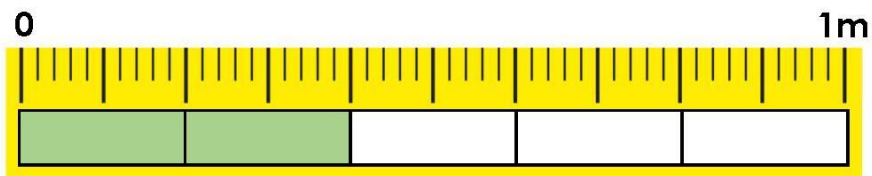
- rarely = often
- died = alive
- horrific = beautiful

SENTENCE

1. 2nd option – adverbs
2. Because they thought he was so horrific to look at, there aren't that many states or pieces of art containing Hades.
3. his = C (determiner)
three-headed = B (adjective)
dog = A (noun)
4. They referred to Hades as "The Wealth-Giver" because precious metals and minerals were found underground where he lived.

Fraction of an Amount

4. Tick the calculation which matches the image below.




- A. $\frac{2}{5}$ of 1m = 30cm B. $\frac{2}{5}$ of 1m = 40cm
- C. $\frac{2}{10}$ of 1m = 20cm D. $\frac{4}{10}$ of 1m = 20cm



VF
HW/Ext

5. Complete the calculation and bar model for the image below.



$$\frac{2}{3} \text{ of } \square \text{ is } \square$$



VF
HW/Ext

6. Mason and Lara are sharing a jar of 24 cookies.



I have eaten $\frac{3}{8}$ of the cookies.



I have eaten $\frac{5}{8}$ of the cookies.

Mason thinks that he has eaten 4 more cookies than Lara. Is he correct? Explain your answer.



RPS
HW/Ext

Homework/Extension Fraction of an Amount

Expected

4. **B**

5.

18		
3	3	3

 $\frac{2}{3}$ of 18 is 12

6. **Mason is not correct. He has eaten 15 cookies and Lara has eaten 9 cookies, so Mason has eaten 6 more cookies than Lara.**